

CANDIDATE
NAME

CENTRE
NUMBER

--	--	--	--	--

CANDIDATE
NUMBER

--	--	--	--

* 8 7 8 8 6 1 2 9 5 8 2 *

CHEMISTRY

0620/31

Paper 3 Theory (Core)

October/November 2017

1 hour 15 minutes

Candidates answer on the Question Paper.

No Additional Materials are required.

READ THESE INSTRUCTIONS FIRST

Write your Centre number, candidate number and name on all the work you hand in.

Write in dark blue or black pen.

You may use an HB pencil for any diagrams or graphs.

Do not use staples, paper clips, glue or correction fluid.

DO **NOT** WRITE IN ANY BARCODES.

Answer **all** questions.

Electronic calculators may be used.

A copy of the Periodic Table is printed on page 16.

You may lose marks if you do not show your working or if you do not use appropriate units.

At the end of the examination, fasten all your work securely together.

The number of marks is given in brackets [] at the end of each question or part question.

The syllabus is approved for use in England, Wales and Northern Ireland as a Cambridge International Level 1/Level 2 Certificate.

This document consists of **15** printed pages and **1** blank page.

2 The table shows the composition of the atmosphere of the planet Neptune.

gas present	percentage of gas in Neptune's atmosphere
helium	19.5
hydrogen	78.8
methane	
other gases	0.2

(a) Complete the table to calculate the percentage of methane in Neptune's atmosphere. [1]

(b) Describe how Neptune's atmosphere differs from the Earth's atmosphere.
Give **three** differences.

1

.....

2

.....

3

.....

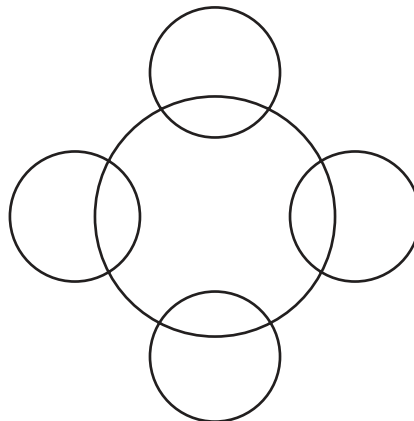
[3]

(c) Methane is a covalent compound.

Complete the diagram to show

- the arrangement of electrons in a molecule of methane,
- the symbols of the atoms present.

Show outer shell electrons only.



[2]

(d) Isotopes of hydrogen are present in Neptune's atmosphere.

(i) What is meant by the term *isotopes*?

.....
 [1]

(ii) An atom of hydrogen has three nucleons.

Deduce the number of protons and neutrons present in **one** atom of this isotope of hydrogen.

Use your Periodic Table to help you.

number of protons
 number of neutrons [2]

(e) Other gases present in Neptune's atmosphere include ethane and water vapour.

(i) Calculate the relative molecular mass of ethane, C_2H_6 .
 Use your Periodic Table to help you.

relative molecular mass = [2]

(ii) Describe a chemical test for water.

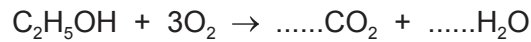
test
 result [2]

[Total: 13]

3 The following substances are present in a liquid floor cleaner.

coloured dyes
ethanol
preservatives
sodium carbonate

(a) (i) Balance the chemical equation for the complete combustion of ethanol.



[2]

(ii) Draw the structure of an ethanol molecule showing all of the atoms and all of the bonds.

[2]

(b) Aqueous sodium carbonate is alkaline.

(i) Which **one** of the following pH values is alkaline?
Put a circle around the correct answer.

pH3 pH6 pH7 pH10

[1]

(ii) Aqueous sodium carbonate is colourless.

An excess of aqueous sodium carbonate is added to a solution of dilute sulfuric acid and methyl orange.

Describe the colour change.

from to [2]

(iii) The chemical equation for the reaction between sodium carbonate and dilute sulfuric acid is shown.



Write the word equation for this reaction.

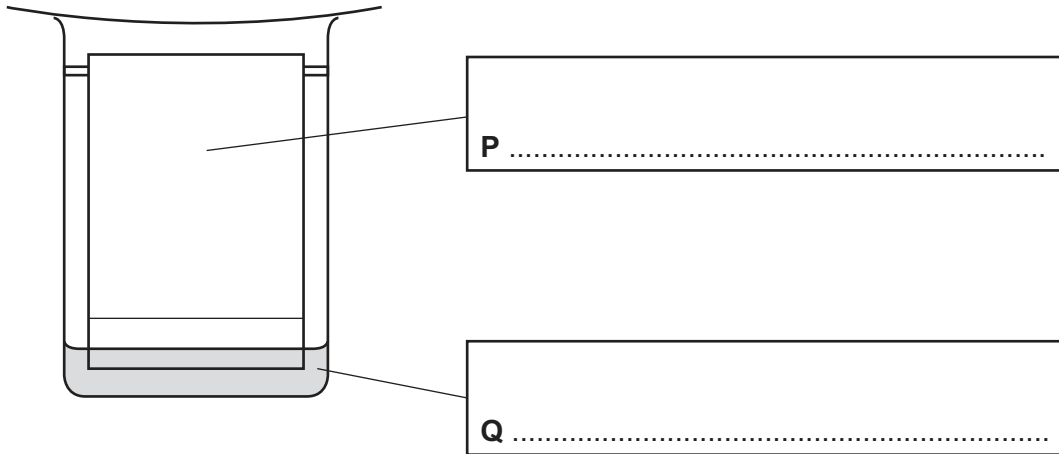
..... [2]

(c) Preservatives stop the growth of bacteria and fungi.

State the name of an acidic gas used to preserve food.

..... [1]

(d) The coloured dyes in the liquid floor cleaner can be separated using the apparatus shown.



(i) Complete the boxes to label **P** and **Q**. [2]

(ii) State the name of this method of separation.

..... [1]

(iii) On the diagram, put an **X** to show where the mixture of coloured dyes is placed at the start of the experiment. [1]

[Total: 14]

4 The table shows the properties of four substances.

substance	boiling point	electrical conductivity of solid	electrical conductivity when molten	density in g/cm ³
graphite				2.25
iodine	low	does not conduct	does not conduct	4.93
potassium	high		conducts	0.86
zinc chloride	high	does not conduct	conducts	2.91

(a) Complete the table to show the electrical conductivity of solid graphite and solid potassium. [2]

(b) Give **one** piece of evidence from the table that shows that iodine is a simple covalent substance. [1]

.....

(c) What information in the table shows that zinc chloride is an ionic compound? [2]

.....

.....

(d) Molten zinc chloride can be electrolysed.

Predict the products of this electrolysis at

the positive electrode (anode),

the negative electrode (cathode).

[2]

(e) Aqueous iodine is formed when aqueous chlorine is added to aqueous potassium iodide.

Use ideas about reactivity to explain why this reaction occurs.

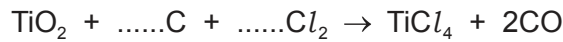
.....

..... [1]

[Total: 8]

5 Titanium is extracted from an ore which contains titanium(IV) oxide, TiO_2 .

(a) (i) Balance the chemical equation for the first step in this extraction.



[2]

(ii) Explain why the conversion of carbon to carbon monoxide is an oxidation reaction.

..... [1]

(b) Titanium is a transition element.
Sodium is a Group I element.

Describe **two** differences in the physical properties of titanium and sodium.

1

.....

2

.....

[2]

(c) The properties and relative reactivity with water of some Group I elements are shown in the table.

element	density in g/cm^3	melting point in $^\circ\text{C}$	relative reactivity with water
lithium	0.53	181	
sodium		98	forms bubbles rapidly but does not burst into flames
potassium	0.86		forms bubbles very rapidly and bursts into flames
rubidium	1.53	39	reacts explosively

(i) Complete the table

- for the relative reactivity of lithium with water,
- to predict the melting point of potassium.

[2]

(ii) Describe the general trend in the density of the Group I elements.

..... [1]

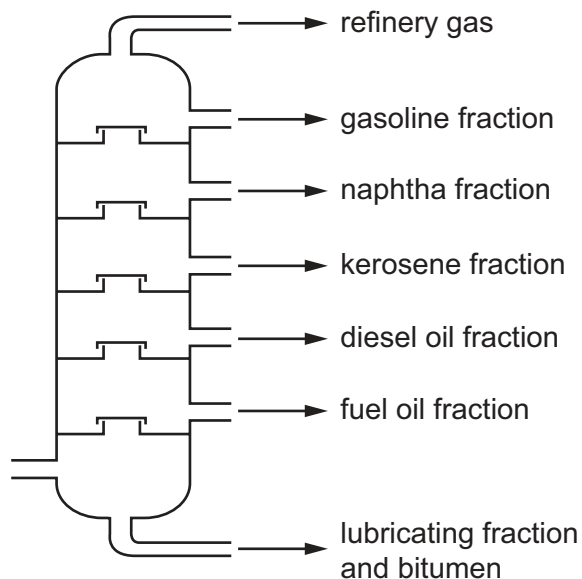
(d) Is lithium oxide an acidic oxide or a basic oxide?
Explain your answer.

.....

..... [1]

[Total: 9]

6 The diagram shows a fractionating column used for the fractional distillation of petroleum.



(a) Describe the fractional distillation of petroleum.

In your answer, include

- where the petroleum enters the fractionating column,
- the relative temperatures in the fractionating column (higher or lower),
- the relative boiling points of the fractions (higher or lower),
- the changes in physical state which occur.

.....

.....

.....

.....

.....

.....

.....

..... [4]

(b) Alkenes can be made by cracking the kerosene fraction.

(i) What is meant by the term *cracking*?

.....
..... [2]

(ii) When butane is cracked, ethene and gas **X** are produced.



State the name of gas **X**.

..... [1]

(c) Complete the sentence about the bonding in butane.

All the bonds in butane are single chemical bonds. [1]

(d) Ethene is used to make poly(ethene).

Which **one** of the following words describes poly(ethene)?
Put a circle around the correct answer.

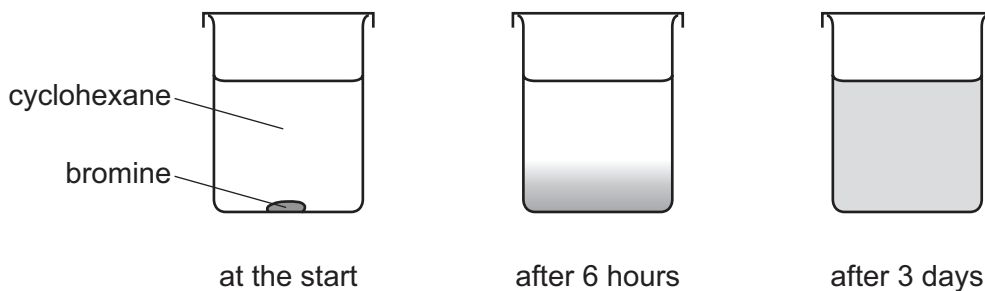
gas **monomer** **polymer** **solvent**

[1]

[Total: 9]

7 Bromine is a red-brown liquid which is soluble in cyclohexane.

- (a) A few drops of liquid bromine were placed at the bottom of a beaker containing cyclohexane. After 3 days, a red-brown colour had spread throughout the beaker.



Explain these observations using the kinetic particle model.

.....

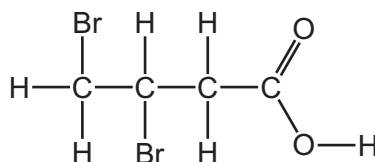
.....

.....

.....

..... [3]

- (b) The structure of a compound containing bromine is shown.



- (i) Deduce the molecular formula of this compound showing the number of carbon, hydrogen, oxygen and bromine atoms.

..... [1]

- (ii) State the name of the $\begin{array}{c} \text{O} \\ // \\ -\text{C} \\ \backslash \\ \text{O}-\text{H} \end{array}$ functional group.

..... [1]

- (c) The relative atomic mass of bromine is 80.

Complete the definition of relative atomic mass using terms from the list.

6

12

an atom

an element

a molecule

average

carbon

hydrogen

total

Relative atomic mass is the mass of naturally occurring atoms
of on a scale where of the ^{12}C isotope has
a mass of exactly units. [4]

- (d) Dilute hydrobromic acid reacts with magnesium ribbon.

- (i) Suggest **three** ways of increasing the rate of this reaction.

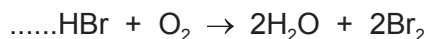
1

2

3 [3]

- (ii) Hydrobromic acid reacts with oxygen. The products are water and bromine.

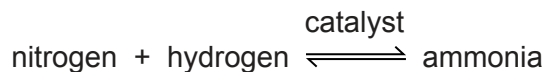
Balance the chemical equation for this reaction.



[1]

[Total: 13]

- 8 Ammonia is manufactured by combining nitrogen and hydrogen at high temperature and pressure.



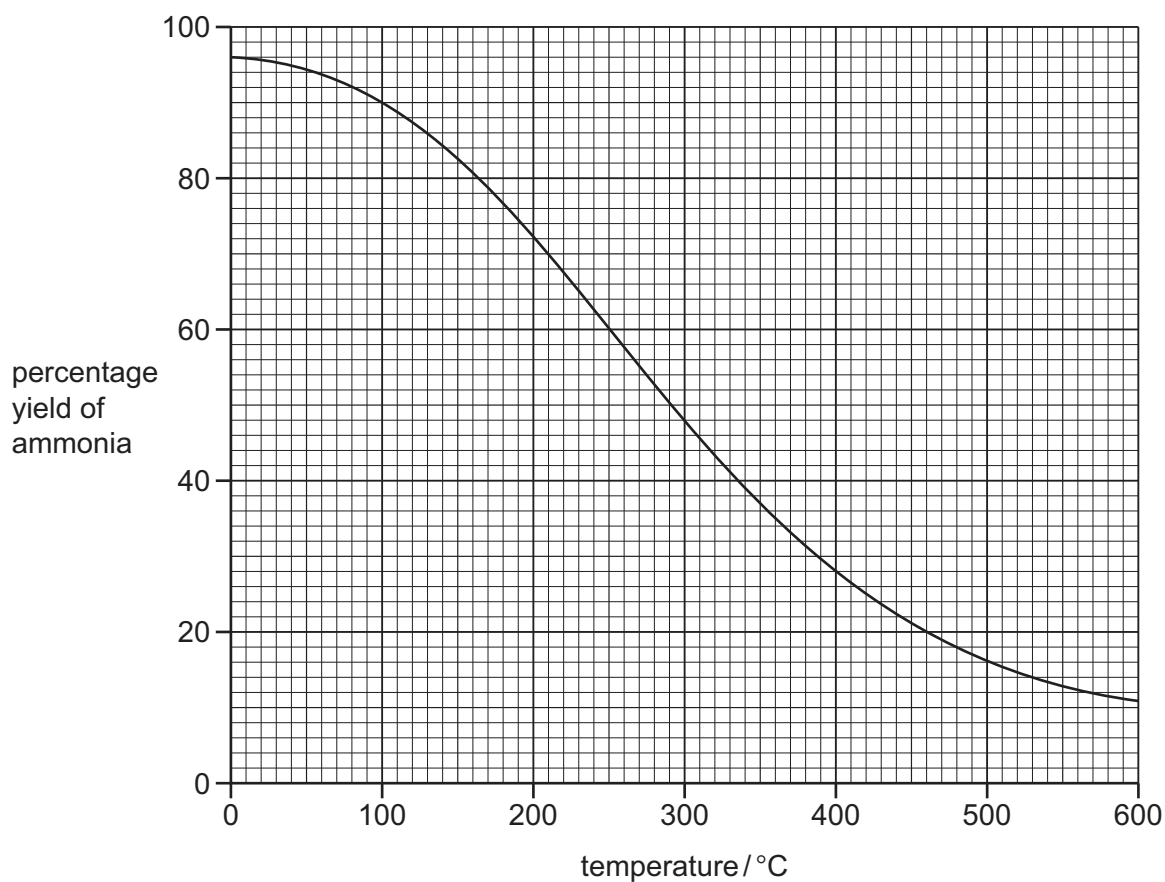
- (a) (i) What is the meaning of the symbol \rightleftharpoons ?

..... [1]

- (ii) What is the purpose of the catalyst?

..... [1]

- (b) The graph shows the percentage yield of ammonia at different temperatures.



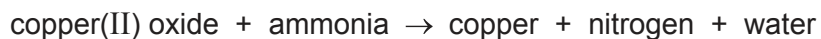
- (i) Describe how the percentage yield of ammonia changes with temperature.

..... [1]

- (ii) Deduce the percentage yield of ammonia at 400 °C.

..... [1]

(c) Copper(II) oxide reacts with ammonia.



When 20g of copper(II) oxide react with an excess of ammonia, 16g of copper are formed.

Calculate the mass of copper formed when 140g of copper(II) oxide react with an excess of ammonia.

..... g [1]

(d) Ammonia is used in the manufacture of nylon.

Give **one** use of nylon.

..... [1]

[Total: 6]

BLANK PAGE

Permission to reproduce items where third-party owned material protected by copyright is included has been sought and cleared where possible. Every reasonable effort has been made by the publisher (UCLES) to trace copyright holders, but if any items requiring clearance have unwittingly been included, the publisher will be pleased to make amends at the earliest possible opportunity.

To avoid the issue of disclosure of answer-related information to candidates, all copyright acknowledgements are reproduced online in the Cambridge International Examinations Copyright Acknowledgements Booklet. This is produced for each series of examinations and is freely available to download at www.cie.org.uk after the live examination series.

Cambridge International Examinations is part of the Cambridge Assessment Group. Cambridge Assessment is the brand name of University of Cambridge Local Examinations Syndicate (UCLES), which is itself a department of the University of Cambridge.

The Periodic Table of Elements

		Group																																																																																																																																																																																																																																																																																																																																																																																																										
I	II	III	IV	V	VI	VII	VIII																																																																																																																																																																																																																																																																																																																																																																																																					
3 Li lithium 7	4 Be beryllium 9	1 H hydrogen 1	5 B boron 11	6 C carbon 12	7 N nitrogen 14	8 O oxygen 16	9 F fluorine 19	10 Ne neon 20																																																																																																																																																																																																																																																																																																																																																																																																				
11 Na sodium 23	12 Mg magnesium 24	Key atomic number atomic symbol name relative atomic mass																																																																																																																																																																																																																																																																																																																																																																																																										
19 K potassium 39	20 Ca calcium 40	21 Sc scandium 45	22 Ti titanium 48	23 V vanadium 51	24 Cr chromium 52	25 Mn manganese 55	26 Fe iron 56	27 Co cobalt 59	28 Ni nickel 59	29 Cu copper 64	30 Zn zinc 65	31 Al aluminium 27	32 Si silicon 28	33 P phosphorus 31	34 S sulfur 32	35 Cl chlorine 35.5	36 Ar argon 40																																																																																																																																																																																																																																																																																																																																																																																											
37 Rb rubidium 85	38 Sr strontium 88	39 Y yttrium 89	40 Zr zirconium 91	41 Nb niobium 93	42 Mo molybdenum 96	43 Tc technetium —	44 Ru ruthenium 101	45 Rh rhodium 103	46 Pd palladium 106	47 Ag silver 108	48 Cd cadmium 112	49 In indium 115	50 Sn tin 119	51 Sb antimony 122	52 Te tellurium 128	53 I iodine 127	54 Xe xenon 131																																																																																																																																																																																																																																																																																																																																																																																											
55 Cs caesium 133	56 Ba barium 137	57–71 lanthanoids	72 Hf hafnium 178	73 Ta tantalum 181	74 W tungsten 184	75 Re rhenium 186	76 Os osmium 190	77 Ir iridium 192	78 Pt platinum 195	79 Au gold 197	80 Hg mercury 201	81 Tl thallium 204	82 Pb lead 207	83 Bi bismuth 209	84 Po polonium —	85 At astatine —	86 Rn radon —																																																																																																																																																																																																																																																																																																																																																																																											
87 Fr francium —	88 Ra radium —	89–103 actinoids	104 Rf rutherfordium —	105 Db dubnium —	106 Sg seaborgium —	107 Bh bohrium —	108 Hs hassium —	109 Mt meitnerium —	110 Ds darmstadtium —	111 Rg roentgenium —	112 Cn copernicium —	114 Fl flerovium —	116 Lv livermorium —	118 Og oganesson —	119 Uu ununennium —	120 Uub ununbium —	121 Uut ununtrium —	122 Uuq ununquadium —	123 Uup ununpentium —	124 Uuq ununhexium —	125 Uuh ununheptium —	126 Uuq ununoctium —	127 Uuh ununenneium —	128 Uuo unununium —	129 Uuq ununtrium —	130 Uuq ununquadium —	131 Uup ununpentium —	132 Uuq ununhexium —	133 Uuh ununheptium —	134 Uuq ununoctium —	135 Uuh ununenneium —	136 Uuo unununium —	137 Uuq ununtrium —	138 Uuq ununquadium —	139 Uup ununpentium —	140 Uuq ununhexium —	141 Uuh ununheptium —	142 Uuq ununoctium —	143 Uuh ununenneium —	144 Uuo unununium —	145 Uuq ununtrium —	146 Uuq ununquadium —	147 Uup ununpentium —	148 Uuq ununhexium —	149 Uuh ununheptium —	150 Uuq ununoctium —	151 Uuh ununenneium —	152 Uuo unununium —	153 Uuq ununtrium —	154 Uuq ununquadium —	155 Uup ununpentium —	156 Uuq ununhexium —	157 Uuh ununheptium —	158 Uuq ununoctium —	159 Uuh ununenneium —	160 Uuo unununium —	161 Uuq ununtrium —	162 Uuq ununquadium —	163 Uup ununpentium —	164 Uuq ununhexium —	165 Uuh ununheptium —	166 Uuq ununoctium —	167 Uuh ununenneium —	168 Uuo unununium —	169 Uuq ununtrium —	170 Uuq ununquadium —	171 Uup ununpentium —	172 Uuq ununhexium —	173 Uuh ununheptium —	174 Uuq ununoctium —	175 Uuh ununenneium —	176 Uuo unununium —	177 Uuq ununtrium —	178 Uuq ununquadium —	179 Uup ununpentium —	180 Uuq ununhexium —	181 Uuh ununheptium —	182 Uuq ununoctium —	183 Uuh ununenneium —	184 Uuo unununium —	185 Uuq ununtrium —	186 Uuq ununquadium —	187 Uup ununpentium —	188 Uuq ununhexium —	189 Uuh ununheptium —	190 Uuq ununoctium —	191 Uuh ununenneium —	192 Uuo unununium —	193 Uuq ununtrium —	194 Uuq ununquadium —	195 Uup ununpentium —	196 Uuq ununhexium —	197 Uuh ununheptium —	198 Uuq ununoctium —	199 Uuh ununenneium —	200 Uuo unununium —	201 Uuq ununtrium —	202 Uuq ununquadium —	203 Uup ununpentium —	204 Uuq ununhexium —	205 Uuh ununheptium —	206 Uuq ununoctium —	207 Uuh ununenneium —	208 Uuo unununium —	209 Uuq ununtrium —	210 Uuq ununquadium —	211 Uup ununpentium —	212 Uuq ununhexium —	213 Uuh ununheptium —	214 Uuq ununoctium —	215 Uuh ununenneium —	216 Uuo unununium —	217 Uuq ununtrium —	218 Uuq ununquadium —	219 Uup ununpentium —	220 Uuq ununhexium —	221 Uuh ununheptium —	222 Uuq ununoctium —	223 Uuh ununenneium —	224 Uuo unununium —	225 Uuq ununtrium —	226 Uuq ununquadium —	227 Uup ununpentium —	228 Uuq ununhexium —	229 Uuh ununheptium —	230 Uuq ununoctium —	231 Uuh ununenneium —	232 Uuo unununium —	233 Uuq ununtrium —	234 Uuq ununquadium —	235 Uup ununpentium —	236 Uuq ununhexium —	237 Uuh ununheptium —	238 Uuq ununoctium —	239 Uuh ununenneium —	240 Uuo unununium —	241 Uuq ununtrium —	242 Uuq ununquadium —	243 Uup ununpentium —	244 Uuq ununhexium —	245 Uuh ununheptium —	246 Uuq ununoctium —	247 Uuh ununenneium —	248 Uuo unununium —	249 Uuq ununtrium —	250 Uuq ununquadium —	251 Uup ununpentium —	252 Uuq ununhexium —	253 Uuh ununheptium —	254 Uuq ununoctium —	255 Uuh ununenneium —	256 Uuo unununium —	257 Uuq ununtrium —	258 Uuq ununquadium —	259 Uup ununpentium —	260 Uuq ununhexium —	261 Uuh ununheptium —	262 Uuq ununoctium —	263 Uuh ununenneium —	264 Uuo unununium —	265 Uuq ununtrium —	266 Uuq ununquadium —	267 Uup ununpentium —	268 Uuq ununhexium —	269 Uuh ununheptium —	270 Uuq ununoctium —	271 Uuh ununenneium —	272 Uuo unununium —	273 Uuq ununtrium —	274 Uuq ununquadium —	275 Uup ununpentium —	276 Uuq ununhexium —	277 Uuh ununheptium —	278 Uuq ununoctium —	279 Uuh ununenneium —	280 Uuo unununium —	281 Uuq ununtrium —	282 Uuq ununquadium —	283 Uup ununpentium —	284 Uuq ununhexium —	285 Uuh ununheptium —	286 Uuq ununoctium —	287 Uuh ununenneium —	288 Uuo unununium —	289 Uuq ununtrium —	290 Uuq ununquadium —	291 Uup ununpentium —	292 Uuq ununhexium —	293 Uuh ununheptium —	294 Uuq ununoctium —	295 Uuh ununenneium —	296 Uuo unununium —	297 Uuq ununtrium —	298 Uuq ununquadium —	299 Uup ununpentium —	300 Uuq ununhexium —	301 Uuh ununheptium —	302 Uuq ununoctium —	303 Uuh ununenneium —	304 Uuo unununium —	305 Uuq ununtrium —	306 Uuq ununquadium —	307 Uup ununpentium —	308 Uuq ununhexium —	309 Uuh ununheptium —	310 Uuq ununoctium —	311 Uuh ununenneium —	312 Uuo unununium —	313 Uuq ununtrium —	314 Uuq ununquadium —	315 Uup ununpentium —	316 Uuq ununhexium —	317 Uuh ununheptium —	318 Uuq ununoctium —	319 Uuh ununenneium —	320 Uuo unununium —	321 Uuq ununtrium —	322 Uuq ununquadium —	323 Uup ununpentium —	324 Uuq ununhexium —	325 Uuh ununheptium —	326 Uuq ununoctium —	327 Uuh ununenneium —	328 Uuo unununium —	329 Uuq ununtrium —	330 Uuq ununquadium —	331 Uup ununpentium —	332 Uuq ununhexium —	333 Uuh ununheptium —	334 Uuq ununoctium —	335 Uuh ununenneium —	336 Uuo unununium —	337 Uuq ununtrium —	338 Uuq ununquadium —	339 Uup ununpentium —	340 Uuq ununhexium —	341 Uuh ununheptium —	342 Uuq ununoctium —	343 Uuh ununenneium —	344 Uuo unununium —	345 Uuq ununtrium —	346 Uuq ununquadium —	347 Uup ununpentium —	348 Uuq ununhexium —	349 Uuh ununheptium —	350 Uuq ununoctium —	351 Uuh ununenneium —	352 Uuo unununium —	353 Uuq ununtrium —	354 Uuq ununquadium —	355 Uup ununpentium —	356 Uuq ununhexium —	357 Uuh ununheptium —	358 Uuq ununoctium —	359 Uuh ununenneium —	360 Uuo unununium —	361 Uuq ununtrium —	362 Uuq ununquadium —	363 Uup ununpentium —	364 Uuq ununhexium —	365 Uuh ununheptium —	366 Uuq ununoctium —	367 Uuh ununenneium —	368 Uuo unununium —	369 Uuq ununtrium —	370 Uuq ununquadium —	371 Uup ununpentium —	372 Uuq ununhexium —	373 Uuh ununheptium —	374 Uuq ununoctium —	375 Uuh ununenneium —	376 Uuo unununium —	377 Uuq ununtrium —	378 Uuq ununquadium —	379 Uup ununpentium —	380 Uuq ununhexium —	381 Uuh ununheptium —	382 Uuq ununoctium —	383 Uuh ununenneium —	384 Uuo unununium —	385 Uuq ununtrium —	386 Uuq ununquadium —	387 Uup ununpentium —	388 Uuq ununhexium —	389 Uuh ununheptium —	390 Uuq ununoctium —	391 Uuh ununenneium —	392 Uuo unununium —	393 Uuq ununtrium —	394 Uuq ununquadium —	395 Uup ununpentium —	396 Uuq ununhexium —	397 Uuh ununheptium —	398 Uuq ununoctium —	399 Uuh ununenneium —	400 Uuo unununium —	401 Uuq ununtrium —	402 Uuq ununquadium —	403 Uup ununpentium —	404 Uuq ununhexium —	405 Uuh ununheptium —	406 Uuq ununoctium —	407 Uuh ununenneium —	408 Uuo unununium —	409 Uuq ununtrium —	410 Uuq ununquadium —	411 Uup ununpentium —	412 Uuq ununhexium —	413 Uuh ununheptium —	414 Uuq ununoctium —	415 Uuh ununenneium —	416 Uuo unununium —	417 Uuq ununtrium —	418 Uuq ununquadium —	419 Uup ununpentium —	420 Uuq ununhexium —	421 Uuh ununheptium —	422 Uuq ununoctium —	423 Uuh ununenneium —	424 Uuo unununium —	425 Uuq ununtrium —	426 Uuq ununquadium —	427 Uup ununpentium —	428 Uuq ununhexium —	429 Uuh ununheptium —	430 Uuq ununoctium —	431 Uuh ununenneium —	432 Uuo unununium —	433 Uuq ununtrium —	434 Uuq ununquadium —	435 Uup ununpentium —	436 Uuq ununhexium —	437 Uuh ununheptium —	438 Uuq ununoctium —	439 Uuh ununenneium —	440 Uuo unununium —	441 Uuq ununtrium —	442 Uuq ununquadium —	443 Uup ununpentium —	444 Uuq ununhexium —	445 Uuh ununheptium —	446 Uuq ununoctium —	447 Uuh ununenneium —	448 Uuo unununium —	449 Uuq ununtrium —	450 Uuq ununquadium —	451 Uup ununpentium —	452 Uuq ununhexium —	453 Uuh ununheptium —	454 Uuq ununoctium —	455 Uuh ununenneium —	456 Uuo unununium —	457 Uuq ununtrium —	458 Uuq ununquadium —	459 Uup ununpentium —	460 Uuq ununhexium —	461 Uuh ununheptium —	462 Uuq ununoctium —	463 Uuh ununenneium —	464 Uuo unununium —	465 Uuq ununtrium —	466 Uuq ununquadium —	467 Uup ununpentium —	468 Uuq ununhexium —	469 Uuh ununheptium —	470 Uuq ununoctium —	471 Uuh ununenneium —	472 Uuo unununium —	473 Uuq ununtrium —	474 Uuq ununquadium —	475 Uup ununpentium —	476 Uuq ununhexium —	477 Uuh ununheptium —	478 Uuq ununoctium —	479 Uuh ununenneium —	480 Uuo unununium —	481 Uuq ununtrium —	482 Uuq ununquadium —	483 Uup ununpentium —	484 Uuq ununhexium —	485 Uuh ununheptium —	486 Uuq ununoctium —	487 Uuh ununenneium —	488 Uuo unununium —	489 Uuq ununtrium —	490 Uuq ununquadium —	491 Uup ununpentium —	492 Uuq ununhexium —	493 Uuh ununheptium —	494 Uuq ununoctium —	495 Uuh ununenneium —	496 Uuo unununium —	497 Uuq ununtrium —	498 Uuq ununquadium —	499 Uup ununpentium —	500